






Chapter 2 - Study Guide

Matching

Vocabulary

Labeling

Parts of the cell:  = Mitochondria,  = Vacuole,  = Ribosome
 = Endoplasmic Reticulum,  = Nucleus

Short Answers

3 basic cell structures, an example, and their job

How cells, tissues, organs, and organ systems are related

List the 8 organ systems we studied and what they do

How muscles work together